
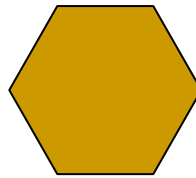






# Tessellation

Which of these shapes tessellate? Test them and add a tick or a cross:



What do all of the tessellating shapes have in common?

\_\_\_\_\_

Which shapes do not tessellate? \_\_\_\_\_

Why is this? \_\_\_\_\_

Which of these sentences is true?

1. Shapes with curved edges and no corners tessellate.

2. Shapes with straight edges and corners tessellate.

Draw and colour your own tessellating pattern. Can you use more than one shape?

Did you know that most holes in a badger sett are arched? Badgers are wide, squat animals and the arch shape suits their bodies.

