











Tally and Tot-up 6



Tally and I always know where we are. We smell the trails we make with our fantastic noses. That way we know our way home.

Coordinates work to show you the position of something by using two numbers. The first number is taken along the bottom of the grid. The next number is taken by looking up the grid. Look at the grid below. Can you find the coordinates of the objects? The first one is done for you.

9									
8									
7									
6									
5									
4									
3									
2									
1									
	1	2	3	4	5	6	7	8	9

1. beetle = 1:6 2. fox = 3. Tally badger = 4. bird 5. flower
6. farmhouse 7. tree 8. pond 9. deer 10. rabbit